

EAD ONLINE CLASSES


Objective Book for

Electrical-JE

Electronics-JE

ITI-Electrician

JE Short Notes



Buy our Books at:-

eadbooks.in
 Amazon

Exam Targeted:-

UPPCL-JE, SSC-JE RRB-JE
PGCIL-DT, DFCCIL-JE, ITI Etc.



Raman sir
Electrical Engg. Expert



LOCATION

- DEHRADUN CENTRE**
EAD Educational Group, Pithuwalan kalan, Dehradun (UK)
- PRAYAGRAJ CENTRE**
EAD Educational Group, Horizon public school,
Pandey Tower, Om gayatari nagar, Near shiv chowraha ,
Salori Prayagraj (UP)

Contact us:-

9389976136

Download EAD Online Classes application on playstore



RAILWAY RECRUITMENT BOARDS

रेलवे भर्ती बोर्ड

Roll No:	
Participants Name:	
Test Center Name:	
Test Date:	23/01/2019
Test Time:	12:30 PM - 3:00 PM
Subject:	Part A and Exam Trade : Machinist

- Options shown in green color with a tick icon are correct
- Chosen option on top right of the question indicates the option selected by the candidate
- The numbers indicated against the Question ID and Option ID are the numbers to be noted and used for raising objections

Section : Part A

Q.1 In an artificial language, 'terake' means 'motherland', 'lorake' means 'mother tongue' and 'loroli' means 'long tongue'. Which word would mean 'long jump' in that language?

- Ans
- 1. hudter
 - 2. nemoli
 - 3. dibnol
 - 4. akezit

Question ID : 7079663756
Option 1 ID : 70796615023
Option 2 ID : 70796615021
Option 3 ID : 70796615022
Option 4 ID : 70796615024
Status : Not Answered
Chosen Option : --

Q.2 In an engineering drawing, which letters written on the dimension indicates that it is extra information and NOT really required?

- Ans
- 1. PER
 - 2. REF
 - 3. EXT
 - 4. NR

Question ID : 7079663698
Option 1 ID : 70796614792
Option 2 ID : 70796614790
Option 3 ID : 70796614789
Option 4 ID : 70796614791
Status : Answered
Chosen Option : 4

Q.3 Henry Cavendish discovered _____ in 1766.

- Ans
- 1. oxygen
 - 2. hydrogen
 - 3. helium
 - 4. chlorine

Question ID : 7079663680
Option 1 ID : 70796614720
Option 2 ID : 70796614718
Option 3 ID : 70796614719
Option 4 ID : 70796614717
Status : Answered
Chosen Option : 2

Q.4 Find the density (in kg/m^3) of a piece of wood of dimensions $6 \text{ cm} \times 8 \text{ cm} \times 5 \text{ cm}$, and weight 1.92 N . (Use $g=10\text{m/s}^2$)

- Ans
- 1. 300
 - 2. 8,000
 - 3. 3,000
 - 4. 800

Question ID : 7079663704
Option 1 ID : 70796614815
Option 2 ID : 70796614813
Option 3 ID : 70796614814
Option 4 ID : 70796614816
Status : Answered
Chosen Option : 4

Q.5 A _____ projection is an oblique projection in which the depth of the object is shown in full size.

- Ans
- 1. perspective
 - 2. orthographic
 - 3. fisheye
 - 4. cavalier

Question ID : 7079663700
Option 1 ID : 70796614797
Option 2 ID : 70796614798
Option 3 ID : 70796614800
Option 4 ID : 70796614799
Status : Not Answered
Chosen Option : --

Q.6 In a certain code, EXACT is written as 91685 and MILK is written as 7243. Using the same code, MELT will be written as _____.

- Ans
- 1. 9285
 - 2. 5384
 - 3. 8794
 - 4. 7945

Question ID : 7079663755
Option 1 ID : 70796615019
Option 2 ID : 70796615017
Option 3 ID : 70796615018
Option 4 ID : 70796615020
Status : Answered
Chosen Option : 4

Q.7 A truck travels 450 km in two and a half hours. Find its speed in m/s.

- Ans 1. 50
 2. 90
 3. 75
 4. 60

Question ID : 7079663719
Option 1 ID : 70796614876
Option 2 ID : 70796614875
Option 3 ID : 70796614874
Option 4 ID : 70796614873
Status : Answered
Chosen Option : 1

Q.8 In a certain gear train, the driver has 24 teeth while the follower has 8 teeth. For every _____ turns of the driver, the follower turns 36 times.

- Ans 1. 4
 2. 10
 3. 12
 4. 9

Question ID : 7079663693
Option 1 ID : 70796614769
Option 2 ID : 70796614771
Option 3 ID : 70796614770
Option 4 ID : 70796614772
Status : Answered
Chosen Option : 1

Q.9 Two numbers are 10% and 20% less than a third number. By what percentage should the second number be increased to make it equal to the first number?

- Ans 1. 8%
 2. 12.5%
 3. 7.5%
 4. 10%

Question ID : 7079663733
Option 1 ID : 70796614930
Option 2 ID : 70796614931
Option 3 ID : 70796614932
Option 4 ID : 70796614929
Status : Answered
Chosen Option : 2

Q.1
0 Henry per meter is the unit of _____.

- Ans
- 1. permittivity
 - 2. permeability
 - 3. electric conductance
 - 4. watt per steradian

Question ID : 7079663702
Option 1 ID : 70796614805
Option 2 ID : 70796614808
Option 3 ID : 70796614806
Option 4 ID : 70796614807
Status : Answered
Chosen Option : 2

Q.1
1 If 90 J of work is done in moving a charge of 2,000 coulombs across V volts, find V.

- Ans
- 1. 2,250
 - 2. 0.045
 - 3. 180
 - 4. 0.2

Question ID : 7079663711
Option 1 ID : 70796614843
Option 2 ID : 70796614841
Option 3 ID : 70796614842
Option 4 ID : 70796614844
Status : Answered
Chosen Option : 2

Q.1
2 If $14 \# 2 = 80$, $10 \# 4 = 70$ and $20 \# 6 = 130$, then find the value of $8 \# 12$.

- Ans
- 1. 4
 - 2. 100
 - 3. 10
 - 4. 2

Question ID : 7079663758
Option 1 ID : 70796615029
Option 2 ID : 70796615032
Option 3 ID : 70796615031
Option 4 ID : 70796615030
Status : Not Answered
Chosen Option : --

Q.1
3 L is thrice as good a workman as M, and together, they finish a task in 12 days. In how many days will L alone finish the same task?

- Ans
- 1. 32
 - 2. 16
 - 3. 40

✗ 4. 48

Question ID : 7079663736
Option 1 ID : 70796614942
Option 2 ID : 70796614943
Option 3 ID : 70796614944
Option 4 ID : 70796614941
Status : Answered
Chosen Option : 4

Q.1 Pipe A can fill a tank in 12 hours. Pipe B can empty it in X hours. If both the pipes are opened together, then the tank
4 will be filled in 30 hours. Find X.

- Ans
- ✗ 1. 25
 - ✓ 2. 20
 - ✗ 3. 24
 - ✗ 4. 15

Question ID : 7079663750
Option 1 ID : 70796614998
Option 2 ID : 70796615000
Option 3 ID : 70796614999
Option 4 ID : 70796614997
Status : Answered
Chosen Option : 2

Q.1 Find the mechanical advantage of a pulley system if it has an efficiency of 60%. The load lifts by 3 m when the rope is
5 pulled by 12 m.

- Ans
- ✗ 1. 3.6
 - ✗ 2. 1.2
 - ✗ 3. 4.8
 - ✓ 4. 2.4

Question ID : 7079663713
Option 1 ID : 70796614849
Option 2 ID : 70796614850
Option 3 ID : 70796614851
Option 4 ID : 70796614852
Status : Answered
Chosen Option : 4

Q.1 ఒక సంస్థలో ఆరు విభాగాలు ఉన్నాయి. 2015 మరియు 2018 సంవత్సరాల్లో ప్రతి విభాగంలోని ఉద్యోగుల సంఖ్యను ఈ బార్ గ్రాఫ్
6 చూపిస్తుంది. కంపెనీ 80 మంది కొత్త ఉద్యోగులను చేర్చుకుంది మరియు 2015 మరియు 2018 సంవత్సరాల మధ్య కొంతమంది
ఉద్యోగులను తొలగించింది. తొలగించిన ఉద్యోగులందరూ C శాఖకు చెందిన వారు. C శాఖ యొక్క ఉద్యోగులను
తొలగించకపోయినట్లుంటే, అప్పుడు 2018 లో C శాఖ యొక్క ఉద్యోగుల సంఖ్య_____ కన్నా ఎక్కువ ఉండేది.



- Ans
- ✗ 1. 17.5%
 - ✓ 2. 12.5%
 - ✗ 3. 20%

4. 10%

Question ID : 7079663770
Option 1 ID : 70796615079
Option 2 ID : 70796615078
Option 3 ID : 70796615080
Option 4 ID : 70796615077
Status : Not Answered
Chosen Option : --

Q.1 In this question, two statements are given, followed by three conclusions labelled I, II and III. You have to consider the
7 statements to be true even if they seem to be at variance with commonly known facts, and decide which of the given conclusions, if any, follow(s) from the given statements.

Statements:

All mansions are palaces.
No castles are palaces.

Conclusions:

I: Some palaces are mansions.
II: Some castles are mansions.
III: No mansions are castles.

Ans 1. Only conclusion I and III follow.

2. Only conclusion I follows.

3. All the conclusions, I, II and III, follow.

4. Only conclusion III follows.

Question ID : 7079663764
Option 1 ID : 70796615055
Option 2 ID : 70796615053
Option 3 ID : 70796615056
Option 4 ID : 70796615054
Status : Answered
Chosen Option : 1

Q.1 Find the heat capacity of a steel vessel of mass 2.5 kg if its temperature rises by 10 degrees. Specific heat capacity of
8 steel is $500 \text{ Jkg}^{-1}\text{K}^{-1}$.

Ans 1. $1,250 \text{ JK}^{-1}$

2. $200 \text{ Jkg}^{-1}\text{K}^{-1}$

3. $20 \text{ Jkg}^{-1}\text{K}^{-1}$

4. 125 JK^{-1}

Question ID : 7079663707
Option 1 ID : 70796614825
Option 2 ID : 70796614826
Option 3 ID : 70796614828
Option 4 ID : 70796614827
Status : Answered
Chosen Option : 1

Q.1 Choose the figure that is different from the rest.
9

Ans

✗ 1.

Q	M	R
X	H	O
K	W	P

✗ 2.

P	O	R
M	W	K
H	X	Q

✗ 3.

H	X	P
O	R	K
W	Q	M

✓ 4.

K	W	Q
R	O	P
I	M	X

Question ID : 7079663765

Option 1 ID : 70796615057

Option 2 ID : 70796615060

Option 3 ID : 70796615059

Option 4 ID : 70796615058

Status : Not Answered

Chosen Option : --

Q.2 Two litres of superheated water at 190°C is mixed with six litres of cold water at 20°C . Find the final equilibrium temperature (in $^{\circ}\text{C}$) if no heat is lost.

Ans ✗ 1. 95

✗ 2. 47.5

✓ 3. 62.5

✗ 4. 55

Question ID : 7079663716

Option 1 ID : 70796614864

Option 2 ID : 70796614862
Option 3 ID : 70796614861
Option 4 ID : 70796614863
Status : Not Answered
Chosen Option : --

Q.2 _____ are a subset of air pollution that refers to the tiny particles suspended everywhere in our atmosphere.

1

- Ans
- 1. Loam
 - 2. Genomes
 - 3. Aerosols
 - 4. Humus

Question ID : 7079663724
Option 1 ID : 70796614896
Option 2 ID : 70796614894
Option 3 ID : 70796614893
Option 4 ID : 70796614895
Status : Not Answered
Chosen Option : --

Q.2 If '+' represents 'x', '-' represents '+', 'x' represents '-' and 'x' represents '-', then find the value of the following expression.

2

$$8 + 4 \div 15 - 3 \times 1$$

- Ans
- 1. 10
 - 2. 14
 - 3. 17
 - 4. 36

Question ID : 7079663757
Option 1 ID : 70796615025
Option 2 ID : 70796615026
Option 3 ID : 70796615027
Option 4 ID : 70796615028
Status : Answered
Chosen Option : 4

Q.2 Name the celebrity who has authored 'Mrs. Funnybones'?

3

- Ans
- 1. Shraddha Kapoor
 - 2. Bipasha Basu
 - 3. Twinkle Khanna
 - 4. Sonakshi Sinha

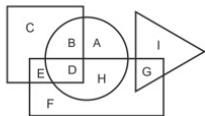
Question ID : 7079663681
Option 1 ID : 70796614723
Option 2 ID : 70796614721
Option 3 ID : 70796614722
Option 4 ID : 70796614724
Status : Not Answered
Chosen Option : --

Q.2 Find the mass (in kg) of kerosene filled up to the brim in a tank of dimensions $5\text{ m} \times 2\text{ m} \times 1\text{ m}$. (Density of kerosene is 800 kg/m^3)

- Ans
- 1. 12,500
 - 2. 800
 - 3. 1,250
 - 4. 8,000

Question ID : 7079663691
Option 1 ID : 70796614764
Option 2 ID : 70796614761
Option 3 ID : 70796614762
Option 4 ID : 70796614763
Status : Answered
Chosen Option : 4

Q.2 In the following figure, the triangle represents bakers, the square represents teachers, the circle represents Americans and the rectangle represents mothers. Which letter or set of letters represents the mothers who are neither Americans nor bakers?



- Ans
- 1. C
 - 2. I
 - 3. A
 - 4. EF

Question ID : 7079663761
Option 1 ID : 70796615041
Option 2 ID : 70796615042
Option 3 ID : 70796615043
Option 4 ID : 70796615044
Status : Answered
Chosen Option : 4

Q.2 Which of the following folk dances is from Himachal Pradesh?

- Ans
- 1. Nati
 - 2. Lezim
 - 3. Giddha
 - 4. Bagurumba

Question ID : 7079663685
Option 1 ID : 70796614739
Option 2 ID : 70796614740
Option 3 ID : 70796614738
Option 4 ID : 70796614737
Status : Not Answered
Chosen Option : --

Q.2 The weights of three boxes are 3 kg, 8 kg and 12 kg. Which of the following CANNOT be the total weight, in kg, of any combination of these boxes?

- Ans
- 1. 20
 - 2. 15
 - 3. 21
 - 4. 23

Question ID : 7079663774
Option 1 ID : 70796615094
Option 2 ID : 70796615093
Option 3 ID : 70796615095
Option 4 ID : 70796615096
Status : Answered
Chosen Option : 3

Q.2
8 If the median of the numbers 9, 15, 1, 15, 14, 9, 4 and X is 11, find X.

- Ans
- 1. 13
 - 2. 12
 - 3. 10
 - 4. 11

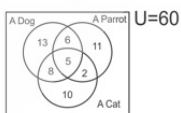
Question ID : 7079663746
Option 1 ID : 70796614984
Option 2 ID : 70796614981
Option 3 ID : 70796614983
Option 4 ID : 70796614982
Status : Answered
Chosen Option : 1

Q.2
9 Who was the captain of the IPL team Chennai Super Kings, in 2018?

- Ans
- 1. Gautam Gambhir
 - 2. Rohit Sharma
 - 3. Virat Kohli
 - 4. Mahendra Singh Dhoni

Question ID : 7079663682
Option 1 ID : 70796614727
Option 2 ID : 70796614728
Option 3 ID : 70796614725
Option 4 ID : 70796614726
Status : Answered
Chosen Option : 2

Q.3
0 The given Venn diagram shows the pet(s) that each house in a society has. How many houses have only two pets?



- Ans
- 1. 15
 - 2. 5
 - 3. 16

X 4. 21

Question ID : 7079663762
Option 1 ID : 70796615048
Option 2 ID : 70796615045
Option 3 ID : 70796615046
Option 4 ID : 70796615047
Status : Answered
Chosen Option : 3

Q.3 A _____ diagram is a schematic drawing that shows the relationships in a system, using simple shapes for the entities.

1

- Ans**
- X** 1. scatter
 - X** 2. circuit
 - X** 3. Venn
 - ✓** 4. block

Question ID : 7079663699
Option 1 ID : 70796614793
Option 2 ID : 70796614796
Option 3 ID : 70796614794
Option 4 ID : 70796614795
Status : Answered
Chosen Option : 3

Q.3 Two cabs A and B start from town C for town D. If the distance between the two towns is 540 km and the slower taxi travelling at an average speed of 90 km/hr takes an hour more than the faster taxi, then find the speed (in km/hr) of the faster taxi.

2

- Ans**
- X** 1. 117
 - X** 2. 126
 - X** 3. 99
 - ✓** 4. 108

Question ID : 7079663706
Option 1 ID : 70796614822
Option 2 ID : 70796614824
Option 3 ID : 70796614821
Option 4 ID : 70796614823
Status : Answered
Chosen Option : 4

Q.3 In this question, two statements are given, followed by two conclusions labelled I and II. You have to consider the statements to be true even if they seem to be at variance with commonly known facts, and decide which of the given conclusions, if any, follow(s) from the given statements.

3

Statements:

No beakers are vases.
All vases are jugs.

Conclusions:

I: Some jugs are beakers.
II: Some jugs are vases.

- Ans**
- X** 1. Both conclusions I and II follow.
 - ✓** 2. Only conclusion II follows.

- 3. Only conclusion I follows.
- 4. Neither conclusion I nor II follows.

Question ID : 7079663763
Option 1 ID : 70796615051
Option 2 ID : 70796615050
Option 3 ID : 70796615049
Option 4 ID : 70796615052
Status : Answered
Chosen Option : 2

Q.3 A vendor buys a certain number of bananas at 8 pieces for `5 and sells them at 5 pieces for `8. What will be his percentage profit?

- Ans
- 1. 40%
 - 2. 48%
 - 3. 144%
 - 4. 156%

Question ID : 7079663741
Option 1 ID : 70796614961
Option 2 ID : 70796614964
Option 3 ID : 70796614963
Option 4 ID : 70796614962
Status : Answered
Chosen Option : 4

Q.3 Classical musician Vilayat Khan is associated with which musical instrument?

- Ans
- 1. Flute
 - 2. Sitar
 - 3. Santoor
 - 4. Sarod

Question ID : 7079663684
Option 1 ID : 70796614736
Option 2 ID : 70796614735
Option 3 ID : 70796614734
Option 4 ID : 70796614733
Status : Not Answered
Chosen Option : --

Q.3 What is the angle between the hour hand and the minute hand of a clock at quarter past three?

- Ans
- 1. 8.5°
 - 2. 6.5°
 - 3. 9.5°
 - 4. 7.5°

Question ID : 7079663749
Option 1 ID : 70796614994
Option 2 ID : 70796614993
Option 3 ID : 70796614996

Option 4 ID : 70796614995
Status : Answered
Chosen Option : 4

Q.3 Paracetamol is found in first-aid boxes. When/why should these drugs be taken?

7

- Ans
- 1. To ease mild pain and reduce high temperature (fever).
 - 2. To ease the symptoms of hay fever and other allergies.
 - 3. To bring relief from asthma.
 - 4. To ease indigestion and heartburn.

Question ID : 7079663717
Option 1 ID : 70796614868
Option 2 ID : 70796614865
Option 3 ID : 70796614866
Option 4 ID : 70796614867
Status : Answered
Chosen Option : 1

Q.3 The notation $2 \times O6$ means _____.

8

- Ans
- 1. 2 circles of radius 6 units
 - 2. Scale the circle of diameter 6 units by a factor of 2
 - 3. 2 circles of diameter 6 units
 - 4. Scale the circle of radius 6 units by a factor of 2

Question ID : 7079663690
Option 1 ID : 70796614757
Option 2 ID : 70796614759
Option 3 ID : 70796614758
Option 4 ID : 70796614760
Status : Answered
Chosen Option : 3

Q.3 By cycling $\frac{7}{9}$ times his usual speed, Anwar reaches his school 4 minutes late. How many minutes does Anwar take to reach school at his usual cycling speed?

9

- Ans
- 1. 16
 - 2. 14
 - 3. 20
 - 4. 18

Question ID : 7079663715
Option 1 ID : 70796614857
Option 2 ID : 70796614858
Option 3 ID : 70796614860
Option 4 ID : 70796614859
Status : Not Answered
Chosen Option : --

Q.4 Find the resistance of the wire (in $k\Omega$) through which a 5 mA current flows when 500 V of potential difference is applied across it.

0

- Ans
- 1. 2,500
 - 2. 1,00,000
 - 3. 100
 - 4. 2.5

Question ID : 7079663712
Option 1 ID : 70796614848
Option 2 ID : 70796614845
Option 3 ID : 70796614846
Option 4 ID : 70796614847
Status : Answered
Chosen Option : 2

Q.4
1 Choose the letter cluster that is different from the rest.

- Ans
- 1. MOQ
 - 2. KLM
 - 3. EFG
 - 4. RST

Question ID : 7079663766
Option 1 ID : 70796615064
Option 2 ID : 70796615061
Option 3 ID : 70796615062
Option 4 ID : 70796615063
Status : Answered
Chosen Option : 1

Q.4
2 Find the slope of the line joining the points (3,-4) and (5,2).

- Ans
- 1. 2
 - 2. 1/2
 - 3. 3
 - 4. 1/3

Question ID : 7079663744
Option 1 ID : 70796614973
Option 2 ID : 70796614976
Option 3 ID : 70796614975
Option 4 ID : 70796614974
Status : Answered
Chosen Option : 3

Q.4
3 Which of the following nations is NOT a permanent member of the United Nations Security Council?

- Ans
- 1. Germany
 - 2. France
 - 3. China
 - 4. United Kingdom

Question ID : 7079663677
Option 1 ID : 70796614705
Option 2 ID : 70796614706
Option 3 ID : 70796614708
Option 4 ID : 70796614707
Status : Answered
Chosen Option : 1

Q.4
4 A/An _____ is an interface on a computer to which you can connect a device.

- Ans
- 1. array
 - 2. anime
 - 3. dongle
 - 4. port

Question ID : 7079663725
Option 1 ID : 70796614898
Option 2 ID : 70796614897
Option 3 ID : 70796614900
Option 4 ID : 70796614899
Status : Answered
Chosen Option : 4

Q.4
5 Choose the word that is different from the rest.

- Ans
- 1. Pool
 - 2. Lake
 - 3. Pond
 - 4. Stream

Question ID : 7079663767
Option 1 ID : 70796615067
Option 2 ID : 70796615066
Option 3 ID : 70796615065
Option 4 ID : 70796615068
Status : Answered
Chosen Option : 4

Q.4
6 Find the third proportional to 24 and 60.

- Ans
- 1. 150
 - 2. 164
 - 3. 144
 - 4. 120

Question ID : 7079663732
Option 1 ID : 70796614926
Option 2 ID : 70796614928
Option 3 ID : 70796614925
Option 4 ID : 70796614927
Status : Answered
Chosen Option : 1

Q.4 The Directive Principles of State Policy in India's Constitution are borrowed from the constitution of _____.

7

- Ans
- 1. Ireland
 - 2. Canada
 - 3. Britain
 - 4. Germany

Question ID : 7079663676
Option 1 ID : 70796614704
Option 2 ID : 70796614702
Option 3 ID : 70796614701
Option 4 ID : 70796614703
Status : Not Answered
Chosen Option : --

Q.4 Pie chart 1 shows the share of the four partners (A, B, C and D) in Company XYZ in the year 2017. In 2018, a fifth partner, E, was added by issuing 5000 shares to E (pie chart 2). The company has issued _____ shares more in 2018 than those in 2017.

8

- Ans
- 1. 20%
 - 2. 33.33%
 - 3. 25%
 - 4. 16.67%

Question ID : 7079663771
Option 1 ID : 70796615082
Option 2 ID : 70796615084
Option 3 ID : 70796615081
Option 4 ID : 70796615083
Status : Not Answered
Chosen Option : --

Q.4 Which of the following is an example of a second class lever?

9

- Ans
- 1. Pliers
 - 2. Ice tongs
 - 3. Wheel barrow
 - 4. See-saw

Question ID : 7079663721
Option 1 ID : 70796614881
Option 2 ID : 70796614883
Option 3 ID : 70796614884
Option 4 ID : 70796614882
Status : Answered
Chosen Option : 3

Q.5
0

One statement is given followed by two assumptions labelled I and II. You have to consider the statement to be true, even if it seems to be at variance with commonly known facts, and decide which of the given assumptions is/are implicit in the given statement.

Statement:

'Height should be between 5 feet 6 inches and 6 feet.' – One of the conditions for recruiting fighter pilots.

Assumptions:

I. Fighter pilots should be presentable as they are role models for the young.

II. Only certain body types can fit in a fighter plane cockpit.

- Ans
- 1. Both assumptions I and II are implicit.
 - 2. Only assumption I is implicit.
 - 3. Only assumption II is implicit.
 - 4. Neither assumption I nor II is implicit.

Question ID : 7079663769

Option 1 ID : 70796615076

Option 2 ID : 70796615073

Option 3 ID : 70796615074

Option 4 ID : 70796615075

Status : Answered

Chosen Option : 3

Q.5
1 _____ ° Celsius = 167 Fahrenheit

- Ans
- 1. 103
 - 2. 75
 - 3. 348
 - 4. 198

Question ID : 7079663720

Option 1 ID : 70796614878

Option 2 ID : 70796614877

Option 3 ID : 70796614879

Option 4 ID : 70796614880

Status : Answered

Chosen Option : 2

Q.5
2 If a vendor sells a coconut at ₹32, he incurs a 20% loss. What is the cost price of the coconut?

- Ans
- 1. ₹48
 - 2. ₹40
 - 3. ₹36
 - 4. ₹44

Question ID : 7079663740

Option 1 ID : 70796614960

Option 2 ID : 70796614958

Option 3 ID : 70796614957

Option 4 ID : 70796614959

Status : Answered

Chosen Option : 2

Q.5 Binary number 101110110 is equal to decimal number _____.

- Ans
- 1. 326
 - 2. 412
 - 3. 468
 - 4. 374

Question ID : 7079663726
Option 1 ID : 70796614901
Option 2 ID : 70796614902
Option 3 ID : 70796614904
Option 4 ID : 70796614903
Status : Answered
Chosen Option : 4

Q.5 Which of the following gives the correct relation between power 'P', resistance 'R' and charge 'Q' flowing through a wire in 't' seconds?

- Ans
- 1. $PR = QIt$
 - 2. $PI = QRt$
 - 3. $Pt = IRQ$
 - 4. $PQ = IRt$

Question ID : 7079663689
Option 1 ID : 70796614756
Option 2 ID : 70796614755
Option 3 ID : 70796614754
Option 4 ID : 70796614753
Status : Answered
Chosen Option : 3

Q.5 Two resistors of $R \Omega$ and 15Ω are connected in parallel to get an effective resistance of 12Ω . Find R.

- Ans
- 1. 45
 - 2. 75
 - 3. 30
 - 4. 60

Question ID : 7079663710
Option 1 ID : 70796614838
Option 2 ID : 70796614840
Option 3 ID : 70796614837
Option 4 ID : 70796614839
Status : Answered
Chosen Option : 4

Q.5 From a 50-m-long steel bar, a workman has to cut off as many 5.25-m-long pieces as possible. What decimal fraction of the whole will be left?

- Ans
- 1. 0.035
 - 2. 0.025
 - 3. 0.045

✓ 4. 0.055

Question ID : 7079663729
Option 1 ID : 70796614916
Option 2 ID : 70796614914
Option 3 ID : 70796614915
Option 4 ID : 70796614913
Status : Not Answered
Chosen Option : --

Q.5
7 Solve the following.

$$\sqrt{0.2025} + \sqrt{0.12225} = \underline{\hspace{2cm}}$$

- Ans
- ✗ 1. 0.9
 - ✓ 2. 0.8
 - ✗ 3. 0.6
 - ✗ 4. 1.2

Question ID : 7079663747
Option 1 ID : 70796614988
Option 2 ID : 70796614985
Option 3 ID : 70796614987
Option 4 ID : 70796614986
Status : Not Answered
Chosen Option : --

Q.5
8 Find the missing number in the given series.

-2.7, -2.1, -1.5, -0.9, -0.3, ?

- Ans
- ✗ 1. 0.4
 - ✗ 2. 0.5
 - ✗ 3. 0.2
 - ✓ 4. 0.3

Question ID : 7079663754
Option 1 ID : 70796615013
Option 2 ID : 70796615014
Option 3 ID : 70796615015
Option 4 ID : 70796615016
Status : Answered
Chosen Option : 4

Q.5
9 Breathing in about 900 parts of _____ in a million parts of air for a short time causes fatigue, dizziness, and headache.

- Ans
- ✗ 1. arsenic
 - ✗ 2. pesticides
 - ✗ 3. asbestos particles
 - ✓ 4. chloroform

Question ID : 7079663694

Option 1 ID : 70796614775
Option 2 ID : 70796614776
Option 3 ID : 70796614773
Option 4 ID : 70796614774
Status : Not Answered
Chosen Option : --

Q.6 Part of a sentence has been divided into three segments, which are jumbled up and given along with the unjumbled part.

0 Rearrange the parts of the sentence in correct order.

I'd just remembered that our

X: every once in a while, so our changing

Y: rooms were movable, on wheels

Z: owner liked to change the decor of the boutique

- Ans**
- 1. ZXY
 - 2. YXZ
 - 3. ZYX
 - 4. XZY

Question ID : 7079663772
Option 1 ID : 70796615088
Option 2 ID : 70796615087
Option 3 ID : 70796615085
Option 4 ID : 70796615086
Status : Answered
Chosen Option : 2

Q.6 A train running at a speed of 64 km/h takes 50 min to travel a certain distance. By how much should it increase its speed

1 (in km/h) to travel the same distance in 40 min?

- Ans**
- 1. 16
 - 2. 25
 - 3. 80
 - 4. 10

Question ID : 7079663738
Option 1 ID : 70796614949
Option 2 ID : 70796614952
Option 3 ID : 70796614950
Option 4 ID : 70796614951
Status : Not Answered
Chosen Option : --

Q.6 A block of metal of mass 500 g has a relative density of 2.5. What will be its apparent mass when it is fully immersed in

2 water?

- Ans**
- 1. 300 g
 - 2. 400 g
 - 3. 250 g
 - 4. 200 g

Question ID : 7079663714
Option 1 ID : 70796614853
Option 2 ID : 70796614856
Option 3 ID : 70796614855

Option 4 ID : 70796614854
Status : Not Answered
Chosen Option : --

Q.6
3 Acceleration due to gravity is highest at _____.

- Ans
- 1. at an infinite distance from the earth
 - 2. the poles
 - 3. the equator
 - 4. the center of the earth

Question ID : 7079663703
Option 1 ID : 70796614812
Option 2 ID : 70796614810
Option 3 ID : 70796614809
Option 4 ID : 70796614811
Status : Answered
Chosen Option : 2

Q.6
4 Which of the following classes of chemicals can damage the ozone layer?

- Ans
- 1. Phenols
 - 2. Aromatic compounds
 - 3. Chlorofluorocarbons
 - 4. Antimicrobials

Question ID : 7079663723
Option 1 ID : 70796614891
Option 2 ID : 70796614889
Option 3 ID : 70796614892
Option 4 ID : 70796614890
Status : Answered
Chosen Option : 3

Q.6
5 Find the least common multiple of 56 and 50.

- Ans
- 1. 700
 - 2. 1400
 - 3. 800
 - 4. 1500

Question ID : 7079663731
Option 1 ID : 70796614921
Option 2 ID : 70796614923
Option 3 ID : 70796614922
Option 4 ID : 70796614924
Status : Answered
Chosen Option : 2

Q.6
6

A statement is given, followed by two conclusions. Decide which of the given conclusions logically follow(s) from the given statement.

Statement:

Emotional Quotient is a good predictor of success in career.

Conclusions:

I: The top 10 employees in a division will have the top 10 Emotional Quotients.

II: Finding the Emotional Quotient of a candidate will give the hiring company extra useful information.

- Ans
- 1. Neither conclusion I nor II follows.
 - 2. Both conclusions I and II follow.
 - 3. Only conclusion I follows.
 - 4. Only conclusion II follows.

Question ID : 7079663775
Option 1 ID : 70796615099
Option 2 ID : 70796615100
Option 3 ID : 70796615097
Option 4 ID : 70796615098
Status : Answered
Chosen Option : 4

Q.6
7 The hotel Taj Lake Palace, built in the middle of Lake Pichola, is in which city?

- Ans
- 1. Jaipur
 - 2. Udaipur
 - 3. Jodhpur
 - 4. Bikaner

Question ID : 7079663683
Option 1 ID : 70796614731
Option 2 ID : 70796614729
Option 3 ID : 70796614730
Option 4 ID : 70796614732
Status : Not Answered
Chosen Option : --

Q.6
8 C said to D, "You are my sister's husband's mother-in-law." How is D related to C?

- Ans
- 1. D is the daughter of C.
 - 2. D is the sister of C.
 - 3. D is the mother of C.
 - 4. D is the mother-in-law of C.

Question ID : 7079663760
Option 1 ID : 70796615039
Option 2 ID : 70796615038
Option 3 ID : 70796615037
Option 4 ID : 70796615040
Status : Answered
Chosen Option : 3

Q.6 Moore's Law is a rule of thumb stated by Intel co-founder Gordon Moore that the number of transistors on a chip
9 doubles every _____ months.

- Ans 1. 18
 2. 24
 3. 12
 4. 30

Question ID : 7079663695
Option 1 ID : 70796614777
Option 2 ID : 70796614779
Option 3 ID : 70796614778
Option 4 ID : 70796614780
Status : Not Answered
Chosen Option : --

Q.7 Which Dadasaheb Phalke Award recipient produced and directed India's first colour film, 'Sairandhri'?
0

- Ans 1. LV Prasad
 2. Sivaji Ganesan
 3. V Shanta ram
 4. Birendranath Sirdar

Question ID : 7079663679
Option 1 ID : 70796614714
Option 2 ID : 70796614716
Option 3 ID : 70796614713
Option 4 ID : 70796614715
Status : Not Answered
Chosen Option : --

Q.7 Acceleration due to gravity on Jupiter is two and a half times that on earth. How much would a 250 kg satellite weigh
1 (in N) on Jupiter? (acceleration due to gravity on earth = 10m/s^2)

- Ans 1. 100
 2. 6,250
 3. 10
 4. 625

Question ID : 7079663696
Option 1 ID : 70796614781
Option 2 ID : 70796614783
Option 3 ID : 70796614784
Option 4 ID : 70796614782
Status : Answered
Chosen Option : 2

Q.7 A alone can paint a wall in 50 days and B alone can do it in 10 days. If A, B and C together can paint the wall in 6.25
2 days, then in how many days can C alone paint the wall?

- Ans 1. 25
 2. 40
 3. 15

4. 20

Question ID : 7079663737
Option 1 ID : 70796614948
Option 2 ID : 70796614947
Option 3 ID : 70796614946
Option 4 ID : 70796614945
Status : Answered
Chosen Option : 1

Q.7
3 Find the efficiency of a pump (rated 400 W) that can lift 500 kg of water by 30 m in 10 minutes. (Use $g = 10\text{m/s}^2$)

- Ans 1. 92.00%
 2. 62.50%
 3. 77.50%
 4. 84.00%

Question ID : 7079663686
Option 1 ID : 70796614744
Option 2 ID : 70796614743
Option 3 ID : 70796614742
Option 4 ID : 70796614741
Status : Answered
Chosen Option : 2

Q.7
4 If $5x/3 - 7/2 (2x/5 - 1/3) = 1/3$, then the value of x is _____.

- Ans 1. 5/14
 2. -25/8
 3. 25/8
 4. -5/14

Question ID : 7079663742
Option 1 ID : 70796614967
Option 2 ID : 70796614965
Option 3 ID : 70796614966
Option 4 ID : 70796614968
Status : Answered
Chosen Option : 2

Q.7
5 If 1,200 J of work is done in pushing a trolley by 20 m, what was the force (in N) employed?

- Ans 1. 30
 2. 120
 3. 60
 4. 90

Question ID : 7079663692
Option 1 ID : 70796614768
Option 2 ID : 70796614765
Option 3 ID : 70796614766
Option 4 ID : 70796614767
Status : Answered

Chosen Option : 3

Q.7
6 The area of A0 size paper is _____.

- Ans
- 1. 100 cm^2
 - 2. $1,000 \text{ cm}^2$
 - 3. $10,000 \text{ cm}^2$
 - 4. 1 cm^2

Question ID : 7079663687
Option 1 ID : 70796614746
Option 2 ID : 70796614748
Option 3 ID : 70796614745
Option 4 ID : 70796614747
Status : Answered
Chosen Option : 3

Q.7
7 Select the set of letters that when sequentially placed in the gaps of the given letter series will complete the series logically.

a _yz_ bx_ zc_ cx_ z

- Ans
- 1. xybcz
 - 2. yxbcz
 - 3. xbycy
 - 4. xybey

Question ID : 7079663753
Option 1 ID : 70796615010
Option 2 ID : 70796615011
Option 3 ID : 70796615012
Option 4 ID : 70796615009
Status : Answered
Chosen Option : 3

Q.7
8 A boy of 50 kg is riding a scooter of 100 kg mass at a speed of v m/s. Find v (in m/s) if the kinetic energy of the scooter and the boy is 76.8 kJ.

- Ans
- 1. 80
 - 2. 32
 - 3. 64
 - 4. 40

Question ID : 7079663705
Option 1 ID : 70796614820
Option 2 ID : 70796614818
Option 3 ID : 70796614817
Option 4 ID : 70796614819
Status : Not Answered
Chosen Option : --

Q.7
9 Amit calculated $\frac{2}{5}$ th of a number instead of calculating $\frac{2}{15}$ th. His answer was greater than the correct answer by 336. Find the number.

- Ans 1. 1260
 2. 1008
 3. 1344
 4. 1680

Question ID : 7079663730
Option 1 ID : 70796614918
Option 2 ID : 70796614919
Option 3 ID : 70796614920
Option 4 ID : 70796614917
Status : Not Answered
Chosen Option : --

Q.8 A car loses 200 kJ of kinetic energy when its speed decreases from 25 m/s to 15 m/s. Find its mass in tonnes.
0

- Ans 1. 2
 2. 2.5
 3. 1.5
 4. 1

Question ID : 7079663718
Option 1 ID : 70796614869
Option 2 ID : 70796614871
Option 3 ID : 70796614870
Option 4 ID : 70796614872
Status : Not Answered
Chosen Option : --

Q.8 Which element is mostly provided by grains, nuts and chocolates in our diet?
1

- Ans 1. Iodine
 2. Chloride
 3. Copper
 4. Zinc

Question ID : 7079663722
Option 1 ID : 70796614886
Option 2 ID : 70796614887
Option 3 ID : 70796614888
Option 4 ID : 70796614885
Status : Answered
Chosen Option : 3

Q.8 The total surface area of a cuboid is 236 cm^2 . Its length is 8 cm and height is 6 cm. Find its breadth (in cm).
2

- Ans 1. 9
 2. 4
 3. 5
 4. 7

Question ID : 7079663735

Option 1 ID : 70796614938
Option 2 ID : 70796614939
Option 3 ID : 70796614940
Option 4 ID : 70796614937
Status : Answered
Chosen Option : 3

Q.8 A uniform meter scale weighs 50g. It is pivoted at the 70cm mark. Where should a 40 g mass be placed so that the scale is in equilibrium?

- Ans
- 1. At the 95 cm mark
 - 2. At the 45 cm mark
 - 3. At the 5 cm mark
 - 4. At the 25 cm mark

Question ID : 7079663697
Option 1 ID : 70796614788
Option 2 ID : 70796614785
Option 3 ID : 70796614786
Option 4 ID : 70796614787
Status : Not Answered
Chosen Option : --

Q.8 Select the option that is related to the third word on the same basis as the second word is related to the first word. Pipe: Cylinder:: Moon : ?

- Ans
- 1. Sphere
 - 2. Night
 - 3. Earth
 - 4. Stars

Question ID : 7079663752
Option 1 ID : 70796615006
Option 2 ID : 70796615007
Option 3 ID : 70796615005
Option 4 ID : 70796615008
Status : Answered
Chosen Option : 1

Q.8 The ratio of the present ages of Leela and her mother is 3:8. The mother was 25 years old when Leela was born. Find the mother's present age (in years).

- Ans
- 1. 48
 - 2. 52
 - 3. 56
 - 4. 40

Question ID : 7079663748
Option 1 ID : 70796614989
Option 2 ID : 70796614992
Option 3 ID : 70796614991
Option 4 ID : 70796614990
Status : Answered
Chosen Option : 4

Q.8 _____ is India's sole National Issuing & Guaranteeing Association for ATA Carnets (also known as 'Passport for Goods').

- Ans
- 1. All India Management Association
 - 2. Federation of Indian Chambers of Commerce & Industry
 - 3. Confederation of Indian Industry
 - 4. International Resources for Fairer Trade

Question ID : 7079663678
Option 1 ID : 70796614711
Option 2 ID : 70796614712
Option 3 ID : 70796614709
Option 4 ID : 70796614710
Status : Not Answered
Chosen Option : --

Q.8 Find the value of:

$$16 - (25\% \text{ of } (14 \times 10 \div 35 + 12 \times 10 \div 15))$$

- Ans
- 1. 11
 - 2. 13
 - 3. 7
 - 4. 9

Question ID : 7079663728
Option 1 ID : 70796614909
Option 2 ID : 70796614912
Option 3 ID : 70796614911
Option 4 ID : 70796614910
Status : Answered
Chosen Option : 2

Q.8 The specific latent heat of fusion of ethyl alcohol is 100 Jg^{-1} . Find the heat absorbed (in J) by 2.25 g of ethyl alcohol when it melts at its melting point of -114°C .

- Ans
- 1. 225
 - 2. 311
 - 3. 45
 - 4. 100

Question ID : 7079663688
Option 1 ID : 70796614751
Option 2 ID : 70796614750
Option 3 ID : 70796614749
Option 4 ID : 70796614752
Status : Not Answered
Chosen Option : --

Q.8 The _____ across the ends of a resistor is directly proportional to the current through it, provided its temperature remains the same.

- Ans
- 1. potential difference

- 2. resistivity
- 3. resistance
- 4. charge

Question ID : 7079663709
Option 1 ID : 70796614835
Option 2 ID : 70796614834
Option 3 ID : 70796614833
Option 4 ID : 70796614836
Status : Answered
Chosen Option : 1

Q.9
0 Which of the following is NOT a derived unit?

- Ans
- 1. Mole
 - 2. Radian
 - 3. Lumen
 - 4. Volt

Question ID : 7079663701
Option 1 ID : 70796614804
Option 2 ID : 70796614801
Option 3 ID : 70796614802
Option 4 ID : 70796614803
Status : Answered
Chosen Option : 3

Q.9
1 If $a^2 + b^2 = 53$ and $ab = 14$, then find the value of $a + b$.

- Ans
- 1. 12
 - 2. 9
 - 3. 15
 - 4. 5

Question ID : 7079663743
Option 1 ID : 70796614972
Option 2 ID : 70796614970
Option 3 ID : 70796614969
Option 4 ID : 70796614971
Status : Answered
Chosen Option : 2

Q.9
2 Find the mass (in g) of a copper calorimeter if its temperature rises by 45° when it absorbs 3.6 kJ of heat. The specific heat capacity of copper is $0.4 \text{ Jg}^{-1}\text{K}^{-1}$.

- Ans
- 1. 200
 - 2. 500
 - 3. 405
 - 4. 648

Question ID : 7079663708
Option 1 ID : 70796614829

Option 2 ID : 70796614832
Option 3 ID : 70796614831
Option 4 ID : 70796614830
Status : Not Answered
Chosen Option : --

Q.9 A pilgrim starts from her house to visit various places. She walks 13 km towards the east, then turns towards the north and walks 11 km, then turns towards the west and walks 7 km, then turns towards the south and walks 6 km and finally turns to her right and walks 6 km. Where is she now with respect to her starting position?

- Ans
- 1. 16 km south
 - 2. 5 km south
 - 3. 5 km north
 - 4. 16 km north

Question ID : 7079663768
Option 1 ID : 70796615071
Option 2 ID : 70796615069
Option 3 ID : 70796615072
Option 4 ID : 70796615070
Status : Answered
Chosen Option : 3

Q.9 If $\sin\theta = 12/13$, then find the value of $2\cot\theta + 13\cos\theta$.

- Ans
- 1. $5/8$
 - 2. $15/8$
 - 3. $35/6$
 - 4. $25/6$

Question ID : 7079663745
Option 1 ID : 70796614980
Option 2 ID : 70796614978
Option 3 ID : 70796614979
Option 4 ID : 70796614977
Status : Not Answered
Chosen Option : --

Q.9 What is the area (in cm^2) of a regular hexagon of side 10 cm?

- Ans
- 1. $150\sqrt{3}$
 - 2. $300\sqrt{3}$
 - 3. $450\sqrt{3}$
 - 4. $75\sqrt{3}$

Question ID : 7079663734
Option 1 ID : 70796614934
Option 2 ID : 70796614935
Option 3 ID : 70796614936
Option 4 ID : 70796614933
Status : Answered
Chosen Option : 1

Q.9 Select the option that is related to the third word on the same basis as the second word is related to the first word. Paper:

6 Glue:: Brick : ?

- Ans 1. Mortar
 2. Mason
 3. Wall
 4. Stone

Question ID : 7079663751
Option 1 ID : 70796615001
Option 2 ID : 70796615004
Option 3 ID : 70796615002
Option 4 ID : 70796615003
Status : Answered
Chosen Option : 3

Q.9 If the compound interest received on a certain amount in the first year is ₹1,440, what will be the compound interest for the second year on the same principal at a 10% rate of interest?

- 7
Ans 1. ₹1,540
 2. ₹1,512
 3. ₹1,584
 4. ₹1,554

Question ID : 7079663739
Option 1 ID : 70796614955
Option 2 ID : 70796614956
Option 3 ID : 70796614954
Option 4 ID : 70796614953
Status : Answered
Chosen Option : 3

Q.9 The sentences given in this question, when properly sequenced, form a coherent paragraph. Each sentence is labelled with a letter (the first sentence is not labelled and given for your reference). Choose the most logical order of sentences from among the given choices to construct a coherent paragraph.

There were once two brothers who lived on the edge of a forest.

A: One day, the elder brother went into the forest to find some firewood to sell in the market.

B: As he went around chopping the branches of a tree after tree, he came upon a magical tree.

C: The elder brother was very mean to his younger brother and ate up all the food and took all his good clothes.

D: The tree said to him, 'Oh kind sir, please do NOT cut my branches.'

- Ans 1. ACBD
 2. ACDB
 3. CABD
 4. CADB

Question ID : 7079663773
Option 1 ID : 70796615091
Option 2 ID : 70796615092
Option 3 ID : 70796615089
Option 4 ID : 70796615090
Status : Not Answered
Chosen Option : --

Q.9 The sum of binary numbers 1100100 and 1101110 is _____.

- Ans
- 1. 11001000
 - 2. 11110010
 - 3. 11010010
 - 4. 11100110

Question ID : 7079663727

Option 1 ID : 70796614906

Option 2 ID : 70796614908

Option 3 ID : 70796614907

Option 4 ID : 70796614905

Status : Not Answered

Chosen Option : --

Q.1 If A \$ B means A is the sister of B, A # B means A is the husband of B and A * B means A is the daughter of B, then what does P \$ Q * R # S mean?

- Ans
- 1. S is the sister-in-law of P.
 - 2. S is the mother of P.
 - 3. S is the grandmother of P.
 - 4. S is the sister of P.

Question ID : 7079663759

Option 1 ID : 70796615034

Option 2 ID : 70796615036

Option 3 ID : 70796615035

Option 4 ID : 70796615033

Status : Not Answered

Chosen Option : --

Section : Machinist

Q.1 What does G17 code represent in CNC milling?

- Ans
- 1. ZY working plane, X-tool axis
 - 2. XZ working plane, Y-tool axis
 - 3. YX working plane, W-tool axis
 - 4. XY working plane, Z-tool axis

Question ID : 7079663850

Option 1 ID : 70796615399

Option 2 ID : 70796615398

Option 3 ID : 70796615400

Option 4 ID : 70796615397

Status : Not Answered

Chosen Option : --

Q.2 In Lever, mechanical advantage is the ratio of _____.

- Ans
- 1. Cost to effort

- 2. Effort to load
- 3. Load to cost
- 4. Load to effort

Question ID : 7079663778
Option 1 ID : 70796615112
Option 2 ID : 70796615110
Option 3 ID : 70796615111
Option 4 ID : 70796615109
Status : Answered
Chosen Option : 4

Q.3 What is the G-Code of Cutter Radius Compensation (CRC) in Right Hand side?

- Ans
- 1. G41
 - 2. G40
 - 3. G17
 - 4. G42

Question ID : 7079663844
Option 1 ID : 70796615374
Option 2 ID : 70796615375
Option 3 ID : 70796615376
Option 4 ID : 70796615373
Status : Not Answered
Chosen Option : --

Q.4 Which property of material is the main reason for the chips to break in machining?

- Ans
- 1. Brittleness
 - 2. Malleability
 - 3. Plasticity
 - 4. Ductility

Question ID : 7079663793
Option 1 ID : 70796615169
Option 2 ID : 70796615171
Option 3 ID : 70796615172
Option 4 ID : 70796615170
Status : Answered
Chosen Option : 1

Q.5 The least count of a Vernier height gauge in the metric system is _____.

- Ans
- 1. 0.1 mm
 - 2. 0.05 mm
 - 3. 0.02 mm
 - 4. 0.001 mm

Question ID : 7079663817
Option 1 ID : 70796615266
Option 2 ID : 70796615265

Option 3 ID : 70796615267
Option 4 ID : 70796615268
Status : Answered
Chosen Option : 3

Q.6 The ratio between original length to the change in length is known as _____.

- Ans 1. Strain
 2. elasticity
 3. Stress
 4. resilience

Question ID : 7079663829
Option 1 ID : 70796615313
Option 2 ID : 70796615316
Option 3 ID : 70796615314
Option 4 ID : 70796615315
Status : Answered
Chosen Option : 1

Q.7 The clearance angle of a drill is between _____.

- Ans 1. 3° to 5°
 2. 12° to 20°
 3. 20° to 25°
 4. 8° to 12°

Question ID : 7079663783
Option 1 ID : 70796615129
Option 2 ID : 70796615131
Option 3 ID : 70796615132
Option 4 ID : 70796615130
Status : Answered
Chosen Option : 2

Q.8 In a planing machine, reciprocating movement of the table is obtained by a _____.

- Ans 1. V-belt
 2. Pulley
 3. Rack and pinion
 4. Flat Belt

Question ID : 7079663815
Option 1 ID : 70796615259
Option 2 ID : 70796615260
Option 3 ID : 70796615257
Option 4 ID : 70796615258
Status : Answered
Chosen Option : 3

Q.9 For rough boring operation one must use _____.

- Ans 1. slow spindle speed and fine feed

- 2. high spindle speed and fine feed
- 3. high spindle speed and coarse feed
- 4. slow spindle speed and coarse feed

Question ID : 7079663840
Option 1 ID : 70796615359
Option 2 ID : 70796615360
Option 3 ID : 70796615358
Option 4 ID : 70796615357
Status : Not Answered
Chosen Option : --

Q.1
0 Rotary motion of the shaft can be converted into reciprocating motion by _____.

- Ans
- 1. Gear box
 - 2. Cam
 - 3. Clutch
 - 4. Headstock

Question ID : 7079663814
Option 1 ID : 70796615256
Option 2 ID : 70796615254
Option 3 ID : 70796615255
Option 4 ID : 70796615253
Status : Answered
Chosen Option : 2

Q.1
1 Direct indexing method in milling is also known as _____.

- Ans
- 1. Compound indexing method
 - 2. Angular indexing method
 - 3. Simple indexing method
 - 4. Rapid indexing method

Question ID : 7079663833
Option 1 ID : 70796615332
Option 2 ID : 70796615331
Option 3 ID : 70796615330
Option 4 ID : 70796615329
Status : Answered
Chosen Option : 3

Q.1
2 What is the operation of sharpening of a grinding wheel called?

- Ans
- 1. Truing
 - 2. Dressing
 - 3. Balancing
 - 4. Aligning

Question ID : 7079663846
Option 1 ID : 70796615381
Option 2 ID : 70796615382
Option 3 ID : 70796615384
Option 4 ID : 70796615383
Status : Answered
Chosen Option : 2

Q.1
3 The size of an engineer's vice is specified according to the _____.

- Ans
- 1. width of the jaws
 - 2. length of the movable jaw
 - 3. height of the vice
 - 4. maximum opening of the jaws

Question ID : 7079663776
Option 1 ID : 70796615102
Option 2 ID : 70796615101
Option 3 ID : 70796615103
Option 4 ID : 70796615104
Status : Answered
Chosen Option : 1

Q.1
4 Which of the following operation has the lowest cutting speed?

- Ans
- 1. Turning
 - 2. Milling
 - 3. Honing
 - 4. grinding

Question ID : 7079663809
Option 1 ID : 70796615236
Option 2 ID : 70796615234
Option 3 ID : 70796615233
Option 4 ID : 70796615235
Status : Answered
Chosen Option : 3

Q.1
5 Which of the following is used to guide the hand die and apply force to cut threads on a lathe?

- Ans
- 1. Tool post
 - 2. Tailstock spindle
 - 3. Cross slide
 - 4. Carriage

Question ID : 7079663799
Option 1 ID : 70796615193
Option 2 ID : 70796615195
Option 3 ID : 70796615196
Option 4 ID : 70796615194

Status : Answered
Chosen Option : 4

Q.1
6 What is the secondary clearance angle of the taper lead and the bevel lead?

- Ans
- 1. 15° to 20°
 - 2. 10° to 12°
 - 3. 5° to 7°
 - 4. 20° to 22°

Question ID : 7079663848
Option 1 ID : 70796615390
Option 2 ID : 70796615389
Option 3 ID : 70796615392
Option 4 ID : 70796615391
Status : Not Answered
Chosen Option : --

Q.1
7 A Knurling tool is a _____.

- Ans
- 1. forming tool and multipoint dish type tool
 - 2. multipoint tool like grinding wheel
 - 3. single point shaper type tool
 - 4. single point tool like form tool

Question ID : 7079663810
Option 1 ID : 70796615237
Option 2 ID : 70796615240
Option 3 ID : 70796615238
Option 4 ID : 70796615239
Status : Answered
Chosen Option : 4

Q.1
8 Head stock accommodates _____ for various spindle speeds.

- Ans
- 1. Gear box
 - 2. Feed gear
 - 3. Motor
 - 4. Half nut

Question ID : 7079663798
Option 1 ID : 70796615189
Option 2 ID : 70796615191
Option 3 ID : 70796615190
Option 4 ID : 70796615192
Status : Answered
Chosen Option : 1

Q.1
9 Iron from its ore is converted to pig iron in a _____.

- Ans
- 1. Open hearth furnace

- 2. Blast furnace
- 3. Electrical furnace
- 4. Cupola furnace

Question ID : 7079663818
Option 1 ID : 70796615272
Option 2 ID : 70796615269
Option 3 ID : 70796615271
Option 4 ID : 70796615270
Status : Answered
Chosen Option : 2

Q.2
0 The quality of surface finish (texture) that can be achieved in good operation condition on a milling machine is _____.

- Ans
- 1. n4 to n8
 - 2. n3 to n4
 - 3. n2 to n4
 - 4. n11 to n12

Question ID : 7079663821
Option 1 ID : 70796615281
Option 2 ID : 70796615282
Option 3 ID : 70796615283
Option 4 ID : 70796615284
Status : Not Answered
Chosen Option : --

Q.2
1 A slight convexity is given to the cutting edge of a chisel to _____.

- Ans
- 1. prevent digging of the ends
 - 2. cut sharp corners
 - 3. allow the lubricant to enter
 - 4. cut curved surfaces

Question ID : 7079663780
Option 1 ID : 70796615119
Option 2 ID : 70796615118
Option 3 ID : 70796615120
Option 4 ID : 70796615117
Status : Answered
Chosen Option : 4

Q.2
2 The rotary feed table is clamped to the machine table using _____.

- Ans
- 1. T-bolt and nut
 - 2. Machine vice
 - 3. Magnetic chuck
 - 4. Chuck

Question ID : 7079663823
Option 1 ID : 70796615290

Option 2 ID : 70796615291
Option 3 ID : 70796615289
Option 4 ID : 70796615292
Status : Answered
Chosen Option : 2

Q.2
3 What is the purpose of clearance angle of a tool?

- Ans
- 1. To increase the heat generation
 - 2. To increase the tool life
 - 3. To allow the chip to flow freely
 - 4. To avoid rubbing of tool with the work

Question ID : 7079663801
Option 1 ID : 70796615204
Option 2 ID : 70796615203
Option 3 ID : 70796615202
Option 4 ID : 70796615201
Status : Answered
Chosen Option : 4

Q.2
4 The _____ is one of the holding devices used for clamping the round rod during marking.

- Ans
- 1. tool makers clamp
 - 2. C-clamp
 - 3. plier
 - 4. V block

Question ID : 7079663836
Option 1 ID : 70796615343
Option 2 ID : 70796615344
Option 3 ID : 70796615341
Option 4 ID : 70796615342
Status : Answered
Chosen Option : 1

Q.2
5 Spring washers are used under nuts to prevent _____.

- Ans
- 1. damage to the bolt
 - 2. damage to the thread
 - 3. damage to the work
 - 4. loosening and fastening of nuts due to vibration

Question ID : 7079663837
Option 1 ID : 70796615347
Option 2 ID : 70796615348
Option 3 ID : 70796615346
Option 4 ID : 70796615345
Status : Answered
Chosen Option : 4

Q.2
6 Centre drilling is done before drilling to _____.

- Ans
- 1. drill a hole accurately at the centre in the face of the job
 - 2. identify the location of the hole
 - 3. carry out pilot drilling operation
 - 4. locate the hole centre exactly at the centre punch mark

Question ID : 7079663813
Option 1 ID : 70796615251
Option 2 ID : 70796615249
Option 3 ID : 70796615252
Option 4 ID : 70796615250
Status : Answered
Chosen Option : 4

Q.2
7 Tool maker's buttons are made of _____.

- Ans
- 1. Bronze
 - 2. Hardened steel
 - 3. Plastic
 - 4. Cast iron

Question ID : 7079663832
Option 1 ID : 70796615328
Option 2 ID : 70796615327
Option 3 ID : 70796615325
Option 4 ID : 70796615326
Status : Answered
Chosen Option : 2

Q.2
8 _____ is also known as Bakelite bond.

- Ans
- 1. Silicate bond
 - 2. Vitrified bond
 - 3. Resin bond
 - 4. Rubber bond

Question ID : 7079663826
Option 1 ID : 70796615303
Option 2 ID : 70796615304
Option 3 ID : 70796615301
Option 4 ID : 70796615302
Status : Answered
Chosen Option : 2

Q.2
9 The formula to find out the change gear to cut 1/2 mm pitch thread on a lathe having 6 mm pitch lead screw is

- Ans
- 1. $d_r/d_n = \text{Pitch to be cut} * 2 / \text{lead screw pitch}$
 - 2. $d_r/d_n = \text{Pitch to be cut} / \text{lead of the machine}$
 - 3. $d_r/d_n = \text{Lead screw pitch} / \text{pitch to be cut} * 2$

4. $d_r/d_n = \text{Pitch to be cut/lead of the machine} * 2$

Question ID : 7079663792
Option 1 ID : 70796615165
Option 2 ID : 70796615167
Option 3 ID : 70796615166
Option 4 ID : 70796615168
Status : Answered
Chosen Option : 4

Q.3
0 What is range of drills provided on a Morse taper?

- Ans
- 1. mt10 to mt15
 - 2. mt0 to mt2
 - 3. mt6 to mt10
 - 4. mt1 to mt5

Question ID : 7079663781
Option 1 ID : 70796615122
Option 2 ID : 70796615124
Option 3 ID : 70796615123
Option 4 ID : 70796615121
Status : Not Answered
Chosen Option : --

Q.3
1 The size of a slotter is specified by the maximum _____.

- Ans
- 1. longitudinal travel of table
 - 2. crosswise travel of table
 - 3. height between table and ram
 - 4. length of stroke of ram

Question ID : 7079663791
Option 1 ID : 70796615161
Option 2 ID : 70796615163
Option 3 ID : 70796615162
Option 4 ID : 70796615164
Status : Answered
Chosen Option : 3

Q.3
2 Which of the following shapes can be produced using a lathe machine?

- Ans
- 1. Irregular shape
 - 2. Cylindrical shape
 - 3. Flat shape
 - 4. Complex shape

Question ID : 7079663835
Option 1 ID : 70796615339
Option 2 ID : 70796615337
Option 3 ID : 70796615338

Option 4 ID : 70796615340
Status : Answered
Chosen Option : 2

Q.3
3 Cutting speed of shapers is always expressed in _____.

- Ans
- 1. Revolutions/minute
 - 2. Number of strokes/minute
 - 3. Meters/minute
 - 4. Millimeters/minute

Question ID : 7079663787
Option 1 ID : 70796615145
Option 2 ID : 70796615148
Option 3 ID : 70796615147
Option 4 ID : 70796615146
Status : Answered
Chosen Option : 3

Q.3
4 For faster cutting, _____ bond wheel is used on a grinding machine.

- Ans
- 1. Shellac
 - 2. Rubber
 - 3. Metal
 - 4. Resinoid

Question ID : 7079663849
Option 1 ID : 70796615394
Option 2 ID : 70796615395
Option 3 ID : 70796615396
Option 4 ID : 70796615393
Status : Not Answered
Chosen Option : --

Q.3
5 Normally button boring operations on irregular shaped heavy jobs are carried out _____.

- Ans
- 1. in three jaw chuck (universal)
 - 2. In Collet chuck
 - 3. between centers
 - 4. in face plate

Question ID : 7079663825
Option 1 ID : 70796615297
Option 2 ID : 70796615300
Option 3 ID : 70796615299
Option 4 ID : 70796615298
Status : Not Answered
Chosen Option : --

Q.3
6 Which of the following formulas is used to calculate rpm where cutting speed and diameter are known?

- Ans
- 1. $1000 \times v/\pi d$

- 2. $1000 \times d/\pi n$
- 3. $1000 \times \pi/ d$
- 4. $1000 \times v/\pi n$

Question ID : 7079663802
Option 1 ID : 70796615207
Option 2 ID : 70796615206
Option 3 ID : 70796615208
Option 4 ID : 70796615205
Status : Answered
Chosen Option : 1

Q.3
7 What is the unit of Torque?

- Ans
- 1. KN
 - 2. N/m
 - 3. N-m
 - 4. N-m/s

Question ID : 7079663779
Option 1 ID : 70796615116
Option 2 ID : 70796615114
Option 3 ID : 70796615113
Option 4 ID : 70796615115
Status : Answered
Chosen Option : 3

Q.3
8 What is the formula for power in Gear Drive?

- Ans
- 1. $P=2 \pi NT$
 - 2. $P= \pi NT/100$
 - 3. $P= 2 \pi NT/60$
 - 4. $P=2 \pi N/100$

Question ID : 7079663831
Option 1 ID : 70796615324
Option 2 ID : 70796615323
Option 3 ID : 70796615321
Option 4 ID : 70796615322
Status : Answered
Chosen Option : 3

Q.3
9 Where should a Facing tool be set at?

- Ans
- 1. Above the centre
 - 2. 1 mm below the centre
 - 3. Below the centre
 - 4. Exactly at the centre

Question ID : 7079663811
Option 1 ID : 70796615241

Option 2 ID : 70796615244
Option 3 ID : 70796615243
Option 4 ID : 70796615242
Status : Answered
Chosen Option : 4

Q.4
0 Identify the formula used for finding the cutting speed of a shaper.

- Ans 1.
(length of the cutting stroke) + (time required by the cutting stroke).
 2.
(length of the cutting stroke) / (time required by the cutting stroke)
 3.
(length of the cutting stroke) × (time required by the cutting stroke)
 4.
(length of the cutting stroke) - (time required by the cutting stroke).

Question ID : 7079663786
Option 1 ID : 70796615143
Option 2 ID : 70796615141
Option 3 ID : 70796615142
Option 4 ID : 70796615144
Status : Answered
Chosen Option : 2

Q.4
1 Tool life is mainly related with _____ of metal.

- Ans 1. toughness
 2. ductility
 3. hardness
 4. brittleness

Question ID : 7079663834
Option 1 ID : 70796615336
Option 2 ID : 70796615334
Option 3 ID : 70796615333
Option 4 ID : 70796615335
Status : Answered
Chosen Option : 3

Q.4
2 The Morse standard taper is available in _____ numbers.

- Ans 1. 10
 2. 8
 3. 20
 4. 12

Question ID : 7079663805
Option 1 ID : 70796615219
Option 2 ID : 70796615220
Option 3 ID : 70796615217

Option 4 ID : 70796615218
Status : Not Answered
Chosen Option : --

Q.4
3 In an all-g geared lathe one has to _____.

- Ans
- 1. position tumbler gear lever to the required spindle speed
 - 2. engage back gear and disengage driving pin to achieve required spindle speed
 - 3. disengage back gear and engage driving pin to achieve required spindle speed
 - 4. position gear change lever to the required spindle speed

Question ID : 7079663797
Option 1 ID : 70796615188
Option 2 ID : 70796615185
Option 3 ID : 70796615186
Option 4 ID : 70796615187
Status : Answered
Chosen Option : 3

Q.4
4 High speed steel tools are used at _____.

- Ans
- 1. lower speed than that of carbon steel tools
 - 2. the same speed as carbide tools
 - 3. the same speed as carbon steel tools
 - 4. higher speed than that of carbon steel tools

Question ID : 7079663790
Option 1 ID : 70796615158
Option 2 ID : 70796615160
Option 3 ID : 70796615157
Option 4 ID : 70796615159
Status : Answered
Chosen Option : 4

Q.4
5 In Stress & Strain diagram, stress is always represented on the _____.

- Ans
- 1. XY-Plane
 - 2. X-axis
 - 3. Y-axis
 - 4. Z-axis

Question ID : 7079663843
Option 1 ID : 70796615372
Option 2 ID : 70796615370
Option 3 ID : 70796615369
Option 4 ID : 70796615371
Status : Answered
Chosen Option : 2

Q.4
6 What are Slab cutters used for?

- Ans
- 1. Chuck
 - 2. Milling narrow surfaces
 - 3. Milling wide surfaces
 - 4. Milling "t" slot

Question ID : 7079663820
Option 1 ID : 70796615280
Option 2 ID : 70796615278
Option 3 ID : 70796615277
Option 4 ID : 70796615279
Status : Not Answered
Chosen Option : --

Q.4
7 Which of the following is a machining process that brings the raw material to the required cylindrical or conical shape using a single point cutter?

- Ans
- 1. Turning
 - 2. Shaping
 - 3. Spinning
 - 4. Slotting

Question ID : 7079663812
Option 1 ID : 70796615247
Option 2 ID : 70796615246
Option 3 ID : 70796615245
Option 4 ID : 70796615248
Status : Answered
Chosen Option : 1

Q.4
8 A _____ is used while cutting grooves and slots over a round job.

- Ans
- 1. angle plate
 - 2. planing centre
 - 3. poppet of dogs
 - 4. planing jack

Question ID : 7079663816
Option 1 ID : 70796615264
Option 2 ID : 70796615261
Option 3 ID : 70796615263
Option 4 ID : 70796615262
Status : Answered
Chosen Option : 3

Q.4
9 What is the full form of LMC?

- Ans
- 1. Light Material Condition
 - 2. Least Material Condition

- 3. Light Metal Contact
- 4. Last Making Component

Question ID : 7079663808
Option 1 ID : 70796615230
Option 2 ID : 70796615229
Option 3 ID : 70796615232
Option 4 ID : 70796615231
Status : Answered
Chosen Option : 1

Q.5
0 The nose radius is half of the shank diameter for which of the following cutters?

- Ans
- 1. Bull Nose Cutter
 - 2. Slot Drill Cutter
 - 3. End Milling Cutter
 - 4. Ball Nose Cutter

Question ID : 7079663842
Option 1 ID : 70796615366
Option 2 ID : 70796615367
Option 3 ID : 70796615368
Option 4 ID : 70796615365
Status : Not Answered
Chosen Option : --

Q.5
1 Which of the following is NOT a part of a shaper?

- Ans
- 1. Clapper box
 - 2. Ram
 - 3. Tool head
 - 4. Cross slide

Question ID : 7079663785
Option 1 ID : 70796615137
Option 2 ID : 70796615138
Option 3 ID : 70796615139
Option 4 ID : 70796615140
Status : Answered
Chosen Option : 4

Q.5
2 Dial gauge is used on lathe to _____.

- Ans
- 1. measure the job
 - 2. true the job
 - 3. draw perpendicular lines
 - 4. draw parallel lines

Question ID : 7079663795
Option 1 ID : 70796615179

Option 2 ID : 70796615178
Option 3 ID : 70796615180
Option 4 ID : 70796615177
Status : Answered
Chosen Option : 2

Q.5
3 In universal dividing head, the worm wheel has _____.

- Ans
- 1. 120 teeth
 - 2. 40 teeth
 - 3. 80 teeth
 - 4. 25 teeth

Question ID : 7079663841
Option 1 ID : 70796615363
Option 2 ID : 70796615361
Option 3 ID : 70796615362
Option 4 ID : 70796615364
Status : Not Answered
Chosen Option : --

Q.5
4 What is the Tailstock centre which does NOT revolve with the work piece known as?

- Ans
- 1. Pipe centre
 - 2. Revolving centre
 - 3. Live centre
 - 4. Dead centre

Question ID : 7079663806
Option 1 ID : 70796615224
Option 2 ID : 70796615222
Option 3 ID : 70796615221
Option 4 ID : 70796615223
Status : Answered
Chosen Option : 4

Q.5
5 In shaping, compound angle may be obtained using _____ vice.

- Ans
- 1. Plain
 - 2. Universal
 - 3. Tool maker's
 - 4. Swivel

Question ID : 7079663789
Option 1 ID : 70796615153
Option 2 ID : 70796615155
Option 3 ID : 70796615156
Option 4 ID : 70796615154
Status : Answered
Chosen Option : 4

Q.5 What are Tab washers used for?

6

- Ans
- 1. loosening the nuts
 - 2. fastening structural fabrications
 - 3. preventing vibration
 - 4. locking the nuts

Question ID : 7079663838
Option 1 ID : 70796615351
Option 2 ID : 70796615352
Option 3 ID : 70796615350
Option 4 ID : 70796615349
Status : Not Answered
Chosen Option : --

Q.5
7 The Carriage used in lathe machine _____.

- Ans
- 1. moves along the lathe bed
 - 2. slides along the cross slide
 - 3. is fixed along the lathe bed
 - 4. moves along the compound rest slide

Question ID : 7079663803
Option 1 ID : 70796615210
Option 2 ID : 70796615211
Option 3 ID : 70796615209
Option 4 ID : 70796615212
Status : Answered
Chosen Option : 2

Q.5
8 The support just behind the tool is provided by _____.

- Ans
- 1. Revolving steady rest
 - 2. Cat head steady rest
 - 3. Follower steady rest
 - 4. Fixed steady rest

Question ID : 7079663807
Option 1 ID : 70796615227
Option 2 ID : 70796615228
Option 3 ID : 70796615226
Option 4 ID : 70796615225
Status : Not Answered
Chosen Option : --

Q.5
9 Which one of the following is NOT an important property for a milling cutter?

- Ans
- 1. Toughness
 - 2. Hardness

- 3. Resistance to wear
- 4. Brittleness

Question ID : 7079663819
Option 1 ID : 70796615274
Option 2 ID : 70796615275
Option 3 ID : 70796615276
Option 4 ID : 70796615273
Status : Answered
Chosen Option : 4

Q.6
0 A screw ring gauge is used for checking _____.

- Ans
- 1. major diameter
 - 2. external threads
 - 3. internal threads
 - 4. dies and taps

Question ID : 7079663828
Option 1 ID : 70796615312
Option 2 ID : 70796615310
Option 3 ID : 70796615309
Option 4 ID : 70796615311
Status : Answered
Chosen Option : 2

Q.6
1 The helical angle of the drill determines the _____.

- Ans
- 1. cutting angle
 - 2. lip angle
 - 3. rake angle
 - 4. web angle

Question ID : 7079663782
Option 1 ID : 70796615125
Option 2 ID : 70796615128
Option 3 ID : 70796615127
Option 4 ID : 70796615126
Status : Answered
Chosen Option : 2

Q.6
2 Why is a clapper box used in a shaper?

- Ans
- 1. To allow using shorter length tools
 - 2. To ensure cutting action
 - 3. To lift the tool during return stroke
 - 4. To lift the tool during cutting stroke

Question ID : 7079663788
Option 1 ID : 70796615149

Option 2 ID : 70796615150
Option 3 ID : 70796615151
Option 4 ID : 70796615152
Status : Answered
Chosen Option : 3

Q.6
3 The type of jig in which a base plate is NOT available is the _____.

- Ans
- 1. Box jig
 - 2. Trunnion jig
 - 3. Latch jig
 - 4. Plate jig

Question ID : 7079663827
Option 1 ID : 70796615306
Option 2 ID : 70796615307
Option 3 ID : 70796615308
Option 4 ID : 70796615305
Status : Not Answered
Chosen Option : --

Q.6
4 Which of the following planing machines is most widely used in a workshop?

- Ans
- 1. Divided table planing machine
 - 2. Standard planing machine
 - 3. Pit planing machine
 - 4. Hydraulic planing machine

Question ID : 7079663800
Option 1 ID : 70796615200
Option 2 ID : 70796615197
Option 3 ID : 70796615199
Option 4 ID : 70796615198
Status : Not Answered
Chosen Option : --

Q.6
5 In a centerless grinder for longitudinal feed, the control wheel is inclined at _____.

- Ans
- 1. 12° to 15°
 - 2. 1° to 7°
 - 3. 8° to 11°
 - 4. 16° to 20°

Question ID : 7079663830
Option 1 ID : 70796615320
Option 2 ID : 70796615318
Option 3 ID : 70796615319
Option 4 ID : 70796615317
Status : Not Answered
Chosen Option : --

Q.6
6 Which one of the following is NOT the cause for the glazing of a grinding wheel?

- Ans
- 1. Dirty coolant
 - 2. Improper dressing
 - 3. Hard wheel in the place of soft wheel
 - 4. Higher wheel speed than recommended

Question ID : 7079663824
Option 1 ID : 70796615295
Option 2 ID : 70796615296
Option 3 ID : 70796615293
Option 4 ID : 70796615294
Status : Not Answered
Chosen Option : --

Q.6
7 Power is transmitted by lead screw to the carriage through a _____.

- Ans
- 1. Worm and gear
 - 2. Half nut
 - 3. Gear box
 - 4. Apron mechanism

Question ID : 7079663804
Option 1 ID : 70796615214
Option 2 ID : 70796615215
Option 3 ID : 70796615213
Option 4 ID : 70796615216
Status : Answered
Chosen Option : 4

Q.6
8 The reamer teeth are unevenly spaced because they _____.

- Ans
- 1. help to cut metal gradually
 - 2. are easy to manufacture
 - 3. can reduce chattering
 - 4. help to remove the reamer easily

Question ID : 7079663784
Option 1 ID : 70796615135
Option 2 ID : 70796615133
Option 3 ID : 70796615134
Option 4 ID : 70796615136
Status : Answered
Chosen Option : 1

Q.6
9 Scribes are made of _____.

- Ans
- 1. High carbon steel
 - 2. Mild steel

- 3. Cast iron
- 4. Brass

Question ID : 7079663777
Option 1 ID : 70796615106
Option 2 ID : 70796615105
Option 3 ID : 70796615108
Option 4 ID : 70796615107
Status : Answered
Chosen Option : 1

Q.7
0 Plane turning is the operation of reducing the _____ of the job throughout its length.

- Ans
- 1. angle
 - 2. temperature
 - 3. diameter
 - 4. diagonal

Question ID : 7079663796
Option 1 ID : 70796615183
Option 2 ID : 70796615184
Option 3 ID : 70796615181
Option 4 ID : 70796615182
Status : Answered
Chosen Option : 3

Q.7
1 More widely positioned component of surface texture is termed as _____.

- Ans
- 1. Waviness
 - 2. Primary texture
 - 3. Lay
 - 4. Roughness

Question ID : 7079663845
Option 1 ID : 70796615379
Option 2 ID : 70796615377
Option 3 ID : 70796615380
Option 4 ID : 70796615378
Status : Not Answered
Chosen Option : --

Q.7
2 Which one of the following cutter is NOT to be ground on the land of the cutter?

- Ans
- 1. Side and face cutter
 - 2. Equal angle cutter
 - 3. Reamer flute cutter
 - 4. Slotting cutter

Question ID : 7079663847
Option 1 ID : 70796615386

Option 2 ID : 70796615385
Option 3 ID : 70796615388
Option 4 ID : 70796615387
Status : Answered
Chosen Option : 1

Q.7
3 The tolerance of a hole is the difference between the _____.

- Ans
- 1. maximum diameter of hole and the minimum diameter of hole
 - 2. minimum diameter of hole and the maximum diameter of shaft
 - 3. maximum diameter of hole and the maximum diameter of shaft
 - 4. maximum diameter of hole and the minimum diameter of shaft

Question ID : 7079663822
Option 1 ID : 70796615286
Option 2 ID : 70796615287
Option 3 ID : 70796615288
Option 4 ID : 70796615285
Status : Answered
Chosen Option : 1

Q.7
4 The distance that the tool advances for each revolution of the work is known as _____.

- Ans
- 1. Spindle speed
 - 2. Revolution Per Minute
 - 3. Cutting speed
 - 4. Feed Rate

Question ID : 7079663839
Option 1 ID : 70796615354
Option 2 ID : 70796615356
Option 3 ID : 70796615355
Option 4 ID : 70796615353
Status : Answered
Chosen Option : 4

Q.7
5 Centre drills are usually held in a _____.

- Ans
- 1. Four jaw chuck
 - 2. Collet chuck
 - 3. Magnetic chuck
 - 4. Drill chuck

Question ID : 7079663794
Option 1 ID : 70796615173
Option 2 ID : 70796615174
Option 3 ID : 70796615176

Option 4 ID : 70796615175

Status : Answered

Chosen Option : 3

